

Match the number to the word:

three	10
thirteen	18
twenty	7
nineteen	8
eighteen	19
seven	3
eight	13
ten	20
















Write the number for each number word:

twenty	_____
fifteen	_____
four	_____
five	_____
eleven	_____
ten	_____
nine	_____

Write the number word and draw that amount:

	Write It	Draw It
20		
11		
7		

Fill in the missing numbers:




Write the number words:

2 \_\_\_\_\_  
15 \_\_\_\_\_  
11 \_\_\_\_\_  
17 \_\_\_\_\_  
6 \_\_\_\_\_  
20 \_\_\_\_\_

Circle the correct number for each word:

<b>nineteen</b>	<b>thirteen</b>	<b>eight</b>
19 16 17	13 12 11	7 0 8
<b>twelve</b>	<b>seven</b>	<b>sixteen</b>
13 12 11	5 7 8	14 13 16

Count and match:

	<p>fifteen</p>
	<p>seventeen</p>
	<p>eighteen</p>

Write the number word for each number:

8	_____
2	_____
11	_____
12	_____
16	_____

Write the number word and draw that amount:

	Write It	Draw It
20		
11		
7		
6		

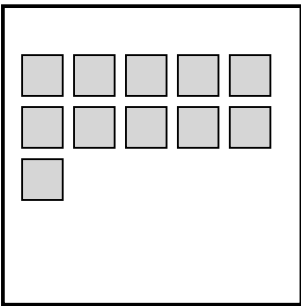


Write the number word and draw that amount:

	Write It	Draw It
17		
3		
8		

Fill in the missing numbers:

1	
	4
5	6
	8
9	
11	12
	14
15	
	18
19	

Count and match:

	<div style="border: 1px solid black; padding: 10px; text-align: center;">twenty</div>
	<div style="border: 1px solid black; padding: 10px; text-align: center;">eleven</div>
	<div style="border: 1px solid black; padding: 10px; text-align: center;">fifteen</div>

Draw this many:

5	
sixteen	
twelve	

Write the number words:

5 \_\_\_\_\_

15 \_\_\_\_\_

14 \_\_\_\_\_

Circle all of the number:

14

14 13 1 3 0 M I

14 3 f 15 37 31 1

2 6 a 6 8 3 14

6 2 1 1g 1 r

0 3 6 42 f 234

14 5 12 1 14 6 i

7 8 98 13 5 0 d 5 c






14 2 6 4 6 3 2 1

1 7 2 2 3 8

14 d 5 6 14 1 3 3

23 32 d 14 r 4 4







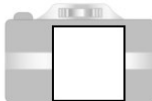



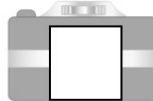

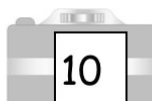


Count and Match:

16	
17	
18	
19	
20	

Circle the correct number for each word:

<p><b>nineteen</b></p> <p>19 18 17</p>	<p><b>twelve</b></p> <p>10 12 13</p>	<p><b>ten</b></p> <p>11 12 10</p>
<p><b>two</b></p> <p>3 4 2</p>	<p><b>twenty</b></p> <p>10 20 12</p>	<p><b>seven</b></p> <p>9 8 7</p>

Fill in the missing numbers:

Write the number word for each number:

20 \_\_\_\_\_

13 \_\_\_\_\_

15 \_\_\_\_\_

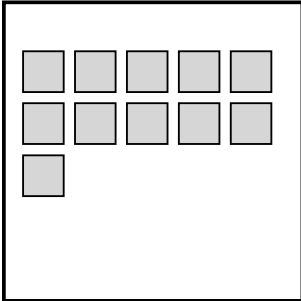
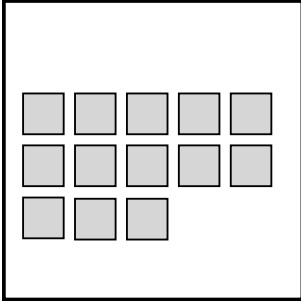
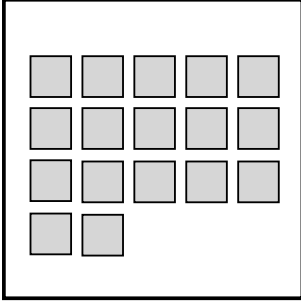
7 \_\_\_\_\_

6 \_\_\_\_\_

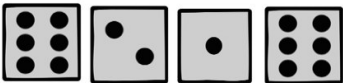




Count and Match:

Fill in the missing number words:

one
four
five
seven
ten
eleven
twelve

	<div style="border: 1px solid black; width: 100%; height: 100%; display: flex; align-items: center; justify-content: center;">17</div>
	<div style="border: 1px solid black; width: 100%; height: 100%; display: flex; align-items: center; justify-content: center;">11</div>
	<div style="border: 1px solid black; width: 100%; height: 100%; display: flex; align-items: center; justify-content: center;">13</div>

Count and Match:

11	
12	
13	
14	
15	

Count and Match:

16	
17	
18	
19	
20	

Circle the correct number word for each number:

19	nineteen	twenty	sixteen
10	ten	eleven	nine
9	fifteen	nine	eight
6	seven	five	six
5	five	eight	seven
4	five	four	eleven
13	thirteen	fifteen	sixteen

Circle all of the number:

**12**

12 5 g 6 1 **1** 4 8  
 f 4 h 7 **34** 56 12 12  
 4 c 1 **10** **9** 6 12 9  
 66 k 8 7 5 8 3 8 **2**  
**9** 8 f q 15 **12** 8  
 6 9 **0** i 11 **77** 2 3  
 9 7 4 6 12 4 0  
 1 j **34** **2** w w e  
 3 12 4 **67** **4** h 9  
 1 0 12 21 **12** j 8  
 y **4** 8 9 3 12 h  
 34 **4** m 12 23 7

Write the number word for each number:

20 \_\_\_\_\_

9 \_\_\_\_\_



Draw this many:

14	
----	--

Write the number words:

20	
13	
14	
8	
15	
7	
18	
6	
16	
12	
9	
19	
10	
11	
17	

Match the number to the number word:

one	15
twenty	3
three	20
seventeen	17
fifteen	5
five	11
nine	9
eleven	1

Complete the addition problems:

$3 + 5 = \underline{\quad}$	$4 + 0 = \underline{\quad}$	$3 + 4 = \underline{\quad}$
$2 + 5 = \underline{\quad}$	$4 + 1 = \underline{\quad}$	$4 + 2 = \underline{\quad}$
$4 + 3 = \underline{\quad}$	$5 + 2 = \underline{\quad}$	$0 + 5 = \underline{\quad}$
$5 + 3 = \underline{\quad}$	$0 + 4 = \underline{\quad}$	$2 + 4 = \underline{\quad}$

Fill in the chart with 5 odd and even numbers:

odd numbers	even numbers

Circle all of the even numbers:

2 3 4 3 1

2 7 9 12

14 16 18 2

3 2 9 17

20 21 16 15

14 10 11 2

7 4 6 8 9

11 12

Complete the addition problems:

$\begin{array}{r} 0 \\ + 2 \\ \hline \end{array}$	$\begin{array}{r} 3 \\ + 5 \\ \hline \end{array}$	$\begin{array}{r} 1 \\ + 4 \\ \hline \end{array}$	$\begin{array}{r} 3 \\ + 2 \\ \hline \end{array}$
$\begin{array}{r} 1 \\ + 5 \\ \hline \end{array}$	$\begin{array}{r} 2 \\ + 2 \\ \hline \end{array}$	$\begin{array}{r} 1 \\ + 2 \\ \hline \end{array}$	$\begin{array}{r} 5 \\ + 2 \\ \hline \end{array}$
$\begin{array}{r} 5 \\ + 4 \\ \hline \end{array}$	$\begin{array}{r} 0 \\ + 4 \\ \hline \end{array}$	$\begin{array}{r} 3 \\ + 3 \\ \hline \end{array}$	$\begin{array}{r} 3 \\ + 4 \\ \hline \end{array}$

Write if each number is odd or even:

4 \_\_\_\_\_

5 \_\_\_\_\_

8 \_\_\_\_\_

7 \_\_\_\_\_

Match the problem to the answer:

$4 + 3 =$	10
$5 + 4 =$	7
$2 + 3 =$	3
$1 + 2 =$	5
$5 + 5 =$	9