







Complete the addition problems:

$\begin{array}{r} 7 \\ + 2 \\ \hline \end{array}$	$\begin{array}{r} 3 \\ + 9 \\ \hline \end{array}$	$\begin{array}{r} 5 \\ + 5 \\ \hline \end{array}$	$\begin{array}{r} 3 \\ + 7 \\ \hline \end{array}$
$\begin{array}{r} 8 \\ + 0 \\ \hline \end{array}$	$\begin{array}{r} 4 \\ + 7 \\ \hline \end{array}$	$\begin{array}{r} 9 \\ + 4 \\ \hline \end{array}$	$\begin{array}{r} 6 \\ + 2 \\ \hline \end{array}$
$\begin{array}{r} 9 \\ + 4 \\ \hline \end{array}$	$\begin{array}{r} 6 \\ + 4 \\ \hline \end{array}$	$\begin{array}{r} 7 \\ + 3 \\ \hline \end{array}$	$\begin{array}{r} 9 \\ + 2 \\ \hline \end{array}$

Write the time each clock says:

 _____	 _____
 _____	 _____
 _____	 _____



Complete the addition problems:

$6 + 7 =$ _____	$4 + 3 =$ _____	$7 + 9 =$ _____
$5 + 2 =$ _____	$6 + 8 =$ _____	$2 + 9 =$ _____
$3 + 6 =$ _____	$7 + 3 =$ _____	$9 + 6 =$ _____

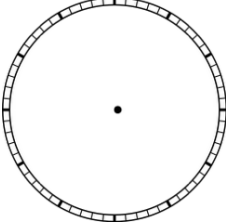
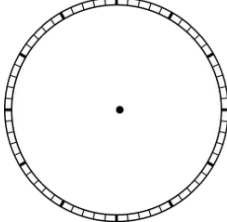
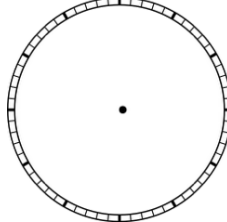
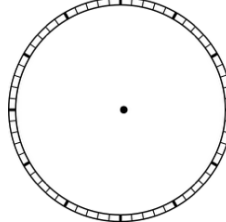
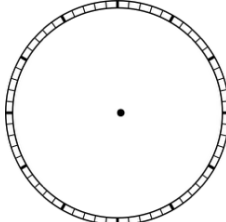
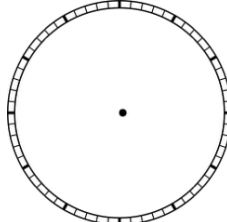
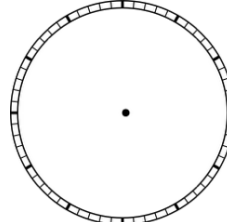
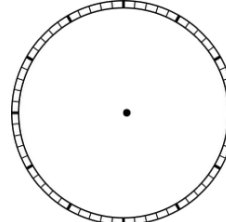
Fill in each box with a greater than, less than, or equal to symbol:

<b>678</b>	<input type="text"/>	<b>600</b>	<b>100</b>	<input type="text"/>	<b>100</b>
<b>45</b>	<input type="text"/>	<b>50</b>	<b>85</b>	<input type="text"/>	<b>90</b>
<b>99</b>	<input type="text"/>	<b>98</b>	<b>40</b>	<input type="text"/>	<b>40</b>

Write the time each clock says:

	_____		_____
---	-------	--	-------

Draw the hands on the clock to make the time:

			
4:30	9:15	12:15	7:45
			
8:15	9:00	12:30	9:15

Complete the addition problems:

$\begin{array}{r} 8 \\ + 6 \\ \hline \end{array}$	$\begin{array}{r} 4 \\ + 9 \\ \hline \end{array}$	$\begin{array}{r} 6 \\ + 1 \\ \hline \end{array}$	$\begin{array}{r} 8 \\ + 4 \\ \hline \end{array}$
$\begin{array}{r} 9 \\ + 3 \\ \hline \end{array}$	$\begin{array}{r} 7 \\ + 5 \\ \hline \end{array}$	$\begin{array}{r} 5 \\ + 0 \\ \hline \end{array}$	$\begin{array}{r} 2 \\ + 5 \\ \hline \end{array}$



Complete the addition problems:

$7 + 2 =$ _____	$6 + 3 =$ _____	$2 + 5 =$ _____
$3 + 8 =$ _____	$4 + 6 =$ _____	$2 + 7 =$ _____
$8 + 2 =$ _____	$5 + 9 =$ _____	$8 + 1 =$ _____





Fill in numbers for the more than, less than, and equal to symbols:

_____ <b>&gt;</b> _____	_____ <b>&lt;</b> _____
_____ <b>&gt;</b> _____	_____ <b>&lt;</b> _____
_____ <b>&gt;</b> _____	_____ <b>=</b> _____

Write the time each clock says:

 _____	 _____
---	--

Write the time each clock says:

 _____	 _____
 _____	 _____

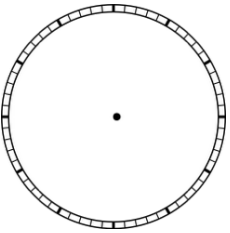
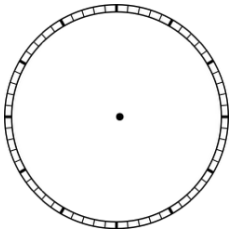
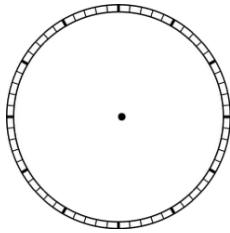
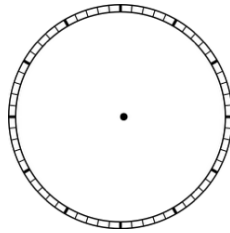
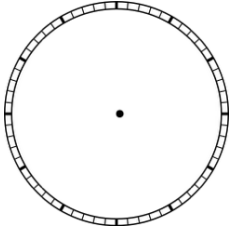
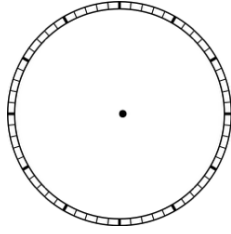
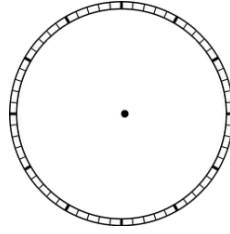
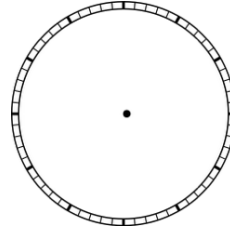
Fill in each box with a greater than, less than, or equal to symbol:

<b>23</b>	<input style="width: 40px; height: 40px;" type="text"/>	<b>435</b>	<b>67</b>	<input style="width: 40px; height: 40px;" type="text"/>	<b>70</b>
<b>67</b>	<input style="width: 40px; height: 40px;" type="text"/>	<b>45</b>	<b>110</b>	<input style="width: 40px; height: 40px;" type="text"/>	<b>89</b>



Complete the addition problems:

$\begin{array}{r} 4 \\ + 7 \\ \hline \end{array}$	$\begin{array}{r} 7 \\ + 8 \\ \hline \end{array}$	$\begin{array}{r} 4 \\ + 4 \\ \hline \end{array}$	$\begin{array}{r} 6 \\ + 2 \\ \hline \end{array}$
$\begin{array}{r} 5 \\ + 7 \\ \hline \end{array}$	$\begin{array}{r} 8 \\ + 5 \\ \hline \end{array}$	$\begin{array}{r} 0 \\ + 4 \\ \hline \end{array}$	$\begin{array}{r} 6 \\ + 3 \\ \hline \end{array}$

Draw the hands on the clock to make the time:

			
8:30	7:15	11:15	1:45
			
8:00	9:30	6:30	5:15

Write the time each clock says:

	_____		_____
---	-------	--	-------

Complete the addition problems:






$6 + 1 =$ _____	$0 + 9 =$ _____	$5 + 3 =$ _____
$4 + 6 =$ _____	$2 + 7 =$ _____	$3 + 5 =$ _____
$7 + 4 =$ _____	$2 + 6 =$ _____	$3 + 7 =$ _____

Complete the addition problems:

$\begin{array}{r} 8 \\ + 6 \\ \hline \end{array}$	$\begin{array}{r} 4 \\ + 9 \\ \hline \end{array}$	$\begin{array}{r} 6 \\ + 1 \\ \hline \end{array}$	$\begin{array}{r} 8 \\ + 4 \\ \hline \end{array}$
$\begin{array}{r} 9 \\ + 3 \\ \hline \end{array}$	$\begin{array}{r} 7 \\ + 5 \\ \hline \end{array}$	$\begin{array}{r} 5 \\ + 0 \\ \hline \end{array}$	$\begin{array}{r} 2 \\ + 5 \\ \hline \end{array}$

Match the clock to the time:


Fill in the correct symbol  $>$ ,  $<$ , or  $=$ :

	4:15
	12:30
	6:00
	2:45
	1:30

17	<input type="text"/>	21
45	<input type="text"/>	30
3	<input type="text"/>	11
10	<input type="text"/>	10
32	<input type="text"/>	21
60	<input type="text"/>	13

Color the clocks that say **2:45** green.  
Color the clocks that say **11:15** orange:

Color the clocks that say **4:30** purple.  
Color the clocks that say **11:45** red:



Complete the addition problems:

$5 + 4 = \underline{\quad}$      $2 + 7 = \underline{\quad}$      $8 + 2 = \underline{\quad}$

$6 + 2 = \underline{\quad}$      $7 + 4 = \underline{\quad}$      $4 + 6 = \underline{\quad}$

$5 + 2 = \underline{\quad}$      $6 + 7 = \underline{\quad}$      $7 + 4 = \underline{\quad}$



Complete the addition problems:

$\begin{array}{r} 6 \\ + 4 \\ \hline \end{array}$	$\begin{array}{r} 9 \\ + 0 \\ \hline \end{array}$	$\begin{array}{r} 9 \\ + 3 \\ \hline \end{array}$	$\begin{array}{r} 2 \\ + 5 \\ \hline \end{array}$
$\begin{array}{r} 6 \\ + 3 \\ \hline \end{array}$	$\begin{array}{r} 4 \\ + 3 \\ \hline \end{array}$	$\begin{array}{r} 8 \\ + 9 \\ \hline \end{array}$	$\begin{array}{r} 4 \\ + 5 \\ \hline \end{array}$
$\begin{array}{r} 7 \\ + 8 \\ \hline \end{array}$	$\begin{array}{r} 2 \\ + 6 \\ \hline \end{array}$	$\begin{array}{r} 5 \\ + 1 \\ \hline \end{array}$	$\begin{array}{r} 8 \\ + 6 \\ \hline \end{array}$

Fill in numbers for the more than, less than, and equal to symbols:

_____ > _____	_____ < _____
_____ < _____	_____ < _____





Complete the addition problems:

$9 + 1 = \underline{\quad}$	$0 + 7 = \underline{\quad}$	$9 + 3 = \underline{\quad}$
$7 + 9 = \underline{\quad}$	$0 + 6 = \underline{\quad}$	$2 + 7 = \underline{\quad}$
$9 + 5 = \underline{\quad}$	$9 + 9 = \underline{\quad}$	$2 + 8 = \underline{\quad}$

Fill in each box with a greater than, less than, or equal to symbol:

<b>45</b> <input type="text"/>	<b>67</b>	<b>99</b> <input type="text"/>	<b>100</b>
<b>300</b> <input type="text"/>	<b>213</b>	<b>809</b> <input type="text"/>	<b>909</b>

Write the time each clock says:

 _____	 _____
 _____	 _____