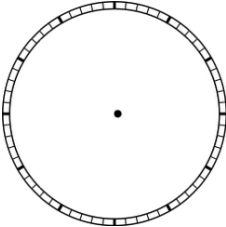
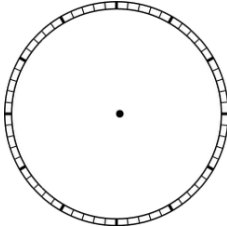
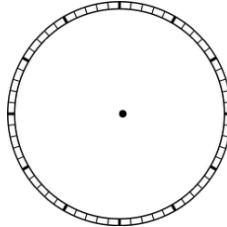
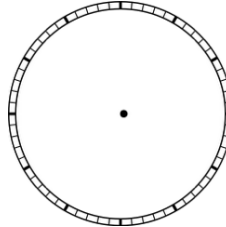
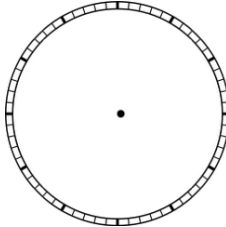
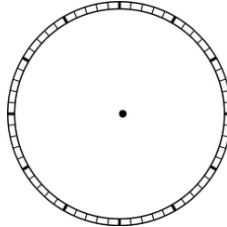
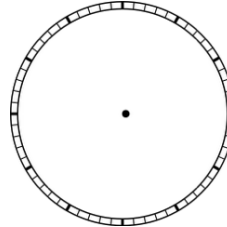
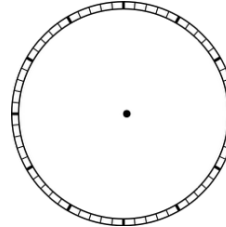




Complete the addition problems:

$\begin{array}{r} 8 \\ + 8 \\ \hline \end{array}$	$\begin{array}{r} 7 \\ + 3 \\ \hline \end{array}$	$\begin{array}{r} 0 \\ + 5 \\ \hline \end{array}$	$\begin{array}{r} 7 \\ + 2 \\ \hline \end{array}$
$\begin{array}{r} 3 \\ + 9 \\ \hline \end{array}$	$\begin{array}{r} 4 \\ + 1 \\ \hline \end{array}$	$\begin{array}{r} 4 \\ + 2 \\ \hline \end{array}$	$\begin{array}{r} 6 \\ + 7 \\ \hline \end{array}$

Draw the hands on the clock to make the time:

 11:15	 10:00	 9:15	 6:30
 8:45	 9:45	 7:45	 4:15

Write the time each clock says:

	_____		_____
---	-------	---	-------

Fill in numbers for the more than, less than, and equal to symbols:

_____ > _____	_____ < _____
_____ < _____	_____ < _____
_____ > _____	_____ = _____

Complete the addition problems:

$2 + 5 =$ _____	$8 + 4 =$ _____	$2 + 4 =$ _____
$6 + 4 =$ _____	$2 + 7 =$ _____	$3 + 5 =$ _____
$2 + 5 =$ _____	$6 + 2 =$ _____	$7 + 8 =$ _____

Complete the addition problems:

$\begin{array}{r} 9 \\ + 4 \\ \hline \end{array}$	$\begin{array}{r} 5 \\ + 7 \\ \hline \end{array}$	$\begin{array}{r} 6 \\ + 3 \\ \hline \end{array}$	$\begin{array}{r} 7 \\ + 4 \\ \hline \end{array}$
$\begin{array}{r} 3 \\ + 6 \\ \hline \end{array}$	$\begin{array}{r} 5 \\ + 4 \\ \hline \end{array}$	$\begin{array}{r} 8 \\ + 2 \\ \hline \end{array}$	$\begin{array}{r} 9 \\ + 4 \\ \hline \end{array}$
$\begin{array}{r} 6 \\ + 7 \\ \hline \end{array}$	$\begin{array}{r} 5 \\ + 1 \\ \hline \end{array}$	$\begin{array}{r} 7 \\ + 2 \\ \hline \end{array}$	$\begin{array}{r} 0 \\ + 6 \\ \hline \end{array}$

Fill in numbers for the more than, less than, and equal to symbols:






_____ < _____	_____ = _____
_____ < _____	_____ < _____
_____ = _____	_____ > _____

Complete the addition problems:

$9 + 3 = \underline{\quad}$ $5 + 6 = \underline{\quad}$ $2 + 5 = \underline{\quad}$
 $6 + 2 = \underline{\quad}$ $5 + 7 = \underline{\quad}$ $4 + 6 = \underline{\quad}$
 $7 + 7 = \underline{\quad}$ $2 + 8 = \underline{\quad}$ $3 + 7 = \underline{\quad}$

Match the clock to the time:






Fill in the correct symbol $>$, $<$, or $=$:

	9:15
	10:30
	12:00
	9:45
	8:30

50	<input style="width: 40px; height: 25px;" type="text"/>	30
23	<input style="width: 40px; height: 25px;" type="text"/>	67
40	<input style="width: 40px; height: 25px;" type="text"/>	50
9	<input style="width: 40px; height: 25px;" type="text"/>	9
91	<input style="width: 40px; height: 25px;" type="text"/>	90
15	<input style="width: 40px; height: 25px;" type="text"/>	20

Fill in the correct symbol $>$, $<$, or $=$: Match the clock to the time:

86	<input type="text"/>	34
50	<input type="text"/>	20
15	<input type="text"/>	15
15	<input type="text"/>	25
30	<input type="text"/>	60
20	<input type="text"/>	21






	4:30
	2:15
	1:45
	5:15
	3:00

Complete the addition problems:

$\begin{array}{r} 8 \\ + 9 \\ \hline \end{array}$	$\begin{array}{r} 0 \\ + 8 \\ \hline \end{array}$	$\begin{array}{r} 3 \\ + 6 \\ \hline \end{array}$	$\begin{array}{r} 7 \\ + 5 \\ \hline \end{array}$
$\begin{array}{r} 6 \\ + 4 \\ \hline \end{array}$	$\begin{array}{r} 7 \\ + 3 \\ \hline \end{array}$	$\begin{array}{r} 9 \\ + 4 \\ \hline \end{array}$	$\begin{array}{r} 6 \\ + 3 \\ \hline \end{array}$

Match the clock to the time:

Fill in the correct symbol $>$, $<$, or $=$:

	4:15
	2:00
	5:15
	1:15
	2:30

40	<input type="text"/>	40
52	<input type="text"/>	51
23	<input type="text"/>	45
22	<input type="text"/>	21
56	<input type="text"/>	76
12	<input type="text"/>	6

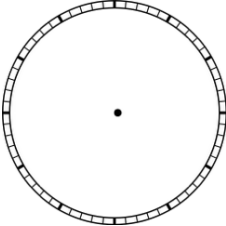
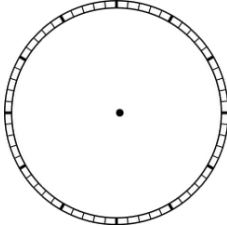
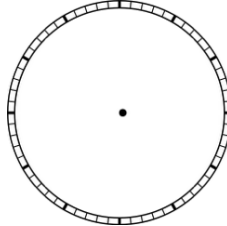
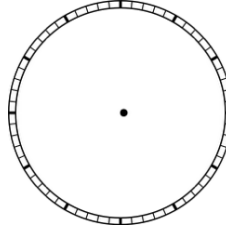
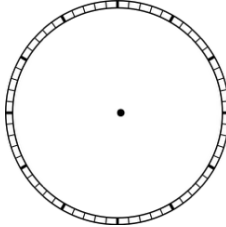
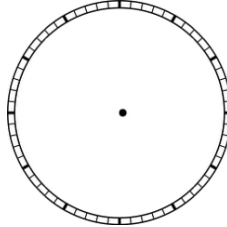
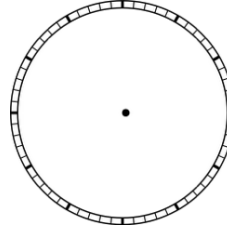
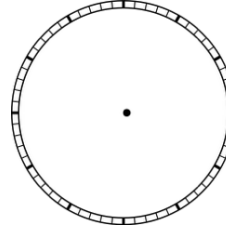
Complete the addition problems:

$8 + 1 =$ _____	$2 + 5 =$ _____	$6 + 7 =$ _____
$6 + 3 =$ _____	$5 + 8 =$ _____	$2 + 9 =$ _____
$3 + 5 =$ _____	$8 + 7 =$ _____	$9 + 3 =$ _____

Complete the addition problems:

$\begin{array}{r} 7 \\ + 5 \\ \hline \end{array}$	$\begin{array}{r} 0 \\ + 0 \\ \hline \end{array}$	$\begin{array}{r} 6 \\ + 3 \\ \hline \end{array}$	$\begin{array}{r} 8 \\ + 5 \\ \hline \end{array}$
$\begin{array}{r} 9 \\ + 3 \\ \hline \end{array}$	$\begin{array}{r} 7 \\ + 5 \\ \hline \end{array}$	$\begin{array}{r} 5 \\ + 0 \\ \hline \end{array}$	$\begin{array}{r} 2 \\ + 5 \\ \hline \end{array}$

Draw the hands on the clock to make the time:

 7:45	 8:15	 11:30	 1:45
 11:15	 9:30	 12:45	 9:00

Write the time each clock says:





Fill in numbers for the more than, less than, and equal to symbols:

_____ > _____

_____ < _____

_____ < _____

_____ < _____

_____ > _____

_____ = _____

Complete the addition problems:

$6 + 7 = \underline{\quad}$ $3 + 6 = \underline{\quad}$ $1 + 5 = \underline{\quad}$


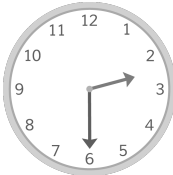


$9 + 3 = \underline{\quad}$ $5 + 7 = \underline{\quad}$ $2 + 6 = \underline{\quad}$

$7 + 5 = \underline{\quad}$ $6 + 3 = \underline{\quad}$ $2 + 8 = \underline{\quad}$

Complete the addition problems:

$\begin{array}{r} 6 \\ + 8 \\ \hline \end{array}$	$\begin{array}{r} 2 \\ + 1 \\ \hline \end{array}$	$\begin{array}{r} 6 \\ + 5 \\ \hline \end{array}$	$\begin{array}{r} 0 \\ + 8 \\ \hline \end{array}$
$\begin{array}{r} 3 \\ + 6 \\ \hline \end{array}$	$\begin{array}{r} 5 \\ + 2 \\ \hline \end{array}$	$\begin{array}{r} 6 \\ + 7 \\ \hline \end{array}$	$\begin{array}{r} 3 \\ + 8 \\ \hline \end{array}$
$\begin{array}{r} 9 \\ + 0 \\ \hline \end{array}$	$\begin{array}{r} 3 \\ + 9 \\ \hline \end{array}$	$\begin{array}{r} 6 \\ + 6 \\ \hline \end{array}$	$\begin{array}{r} 2 \\ + 7 \\ \hline \end{array}$

Write the time each clock says:






	_____		_____
	_____		_____

Complete the addition problems:

$6 + 4 = \underline{\quad}$ $5 + 7 = \underline{\quad}$ $2 + 5 = \underline{\quad}$
 $6 + 8 = \underline{\quad}$ $3 + 2 = \underline{\quad}$ $5 + 0 = \underline{\quad}$
 $5 + 3 = \underline{\quad}$ $2 + 7 = \underline{\quad}$ $5 + 4 = \underline{\quad}$

Match the clock to the time:

Fill in the correct symbol $>$, $<$, or $=$:

	3:45
	5:00
	3:15
	7:45
	7:15

23	<input style="width: 40px; height: 20px;" type="text"/>	21
5	<input style="width: 40px; height: 20px;" type="text"/>	5
50	<input style="width: 40px; height: 20px;" type="text"/>	40
17	<input style="width: 40px; height: 20px;" type="text"/>	18
75	<input style="width: 40px; height: 20px;" type="text"/>	80
32	<input style="width: 40px; height: 20px;" type="text"/>	33


Complete the subtraction problems:

$4 - 2 = \underline{\quad}$ $7 - 4 = \underline{\quad}$ $6 - 0 = \underline{\quad}$

$7 - 0 = \underline{\quad}$ $6 - 3 = \underline{\quad}$ $4 - 3 = \underline{\quad}$

$5 - 2 = \underline{\quad}$ $7 - 2 = \underline{\quad}$ $5 - 0 = \underline{\quad}$

Add each group of coins and write the total:



Write out each number:

678: _____

312: _____